

PHYSICS (SPECIFICATION A)
Unit 4 Waves, Fields and Nuclear Energy

PA04

Section A

Thursday 17 June 2004 Morning Session

In addition to this paper you will require:

- an objective test answer sheet;
- a black ball-point pen;
- a calculator;
- a question paper/answer book for Section B (enclosed).

Time allowed: The total time for Section A and Section B of this paper is 1 hour 30 minutes

Instructions

- Use a black ball-point pen. Do **not** use pencil.
- Answer **all** questions in this section.
- For each question there are four responses. When you have selected the response which you think is the most appropriate answer to a question, mark this response on your answer sheet.
- Mark all responses as instructed on your answer sheet. If you wish to change your answer to a question, follow the instructions on your answer sheet.
- Do all rough work in this book, **not** on the answer sheet.

Information

- The maximum mark for this section is 30.
- Section A and Section B of this paper together carry 15% of the total marks for Physics Advanced.
- All questions in Section A carry equal marks. No deductions will be made for incorrect answers.
- A *Data Sheet* is provided on pages 3 and 4. You may wish to detach this perforated sheet at the start of the examination.
- The question paper/answer book for Section B is enclosed within this question paper.

Data Sheet

- A perforated *Data Sheet* is provided as pages 3 and 4 of this question paper.
- This sheet may be useful for answering some of the questions in the examination.
- You may wish to detach this sheet before you begin work.

$$\text{magnitude of induced e.m.f.} = N \frac{\Delta\Phi}{\Delta t}$$

$$I_{\text{rms}} = \frac{I_0}{\sqrt{2}}$$

$$V_{\text{rms}} = \frac{V_0}{\sqrt{2}}$$

Mechanical and Thermal Properties

$$\text{the Young modulus} = \frac{\text{tensile stress}}{\text{tensile strain}} = \frac{F l}{A e}$$

$$\text{energy stored} = \frac{1}{2} Fe$$

$$\Delta Q = mc \Delta\theta$$

$$\Delta Q = ml$$

$$pV = \frac{1}{3} Nmc^2$$

$$\frac{1}{2} mc^2 = \frac{3}{2} kT = \frac{3RT}{2N_A}$$

Nuclear Physics and Turning Points in Physics

$$\text{force} = \frac{eV_p}{d}$$

$$\text{force} = Bev$$

$$\text{radius of curvature} = \frac{mv}{Be}$$

$$\frac{eV}{d} = mg$$

$$\text{work done} = eV$$

$$F = 6\pi\eta rv$$

$$I = k \frac{I_0}{x^2}$$

$$\frac{\Delta N}{\Delta t} = -\lambda N$$

$$\lambda = \frac{h}{\sqrt{2meV}}$$

$$N = N_0 e^{-\lambda t}$$

$$T_{\frac{1}{2}} = \frac{\ln 2}{\lambda}$$

$$R = r_0 A^{\frac{1}{3}}$$

$$E = mc^2 = \frac{m_0 c^2}{\left(1 - \frac{v^2}{c^2}\right)^{\frac{1}{2}}}$$

$$l = l_0 \left(1 - \frac{v^2}{c^2}\right)^{\frac{1}{2}}$$

$$t = \frac{t_0}{\left(1 - \frac{v^2}{c^2}\right)^{\frac{1}{2}}}$$

Astrophysics and Medical Physics

Body	Mass/kg	Mean radius/m
Sun	2.00×10^{30}	7.00×10^8
Earth	6.00×10^{24}	6.40×10^6

$$1 \text{ astronomical unit} = 1.50 \times 10^{11} \text{ m}$$

$$1 \text{ parsec} = 206265 \text{ AU} = 3.08 \times 10^{16} \text{ m} = 3.26 \text{ ly}$$

$$1 \text{ light year} = 9.45 \times 10^{15} \text{ m}$$

$$\text{Hubble constant } (H) = 65 \text{ km s}^{-1} \text{ Mpc}^{-1}$$

$$M = \frac{\text{angle subtended by image at eye}}{\text{angle subtended by object at unaided eye}}$$

$$M = \frac{f_o}{f_c}$$

$$m - M = 5 \log \frac{d}{10}$$

$$\lambda_{\text{max}} T = \text{constant} = 0.0029 \text{ m K}$$

$$v = Hd$$

$$P = \sigma AT^4$$

$$\frac{\Delta f}{f} = \frac{v}{c}$$

$$\frac{\Delta \lambda}{\lambda} = -\frac{v}{c}$$

$$R_s \approx \frac{2GM}{c^2}$$

Medical Physics

$$\text{power} = \frac{1}{f}$$

$$\frac{1}{u} + \frac{1}{v} = \frac{1}{f} \text{ and } m = \frac{v}{u}$$

$$\text{intensity level} = 10 \log \frac{I}{I_0}$$

$$I = I_0 e^{-\mu x}$$

$$\mu_m = \frac{\mu}{\rho}$$

Electronics

Resistors

Preferred values for resistors (E24)
Series: 1.0 1.1 1.2 1.3 1.5 1.6 1.8 2.0 2.2 2.4 2.7 3.0 3.3 3.6 3.9 4.3 4.7 5.1 5.6 6.2 6.8 7.5 8.2 9.1 ohms
and multiples that are ten times greater

$$Z = \frac{V_{\text{rms}}}{I_{\text{rms}}}$$

$$\frac{1}{C_T} = \frac{1}{C_1} + \frac{1}{C_2} + \frac{1}{C_3} + \dots$$

$$C_T = C_1 + C_2 + C_3 + \dots$$

$$X_C = \frac{1}{2\pi f C}$$

Alternating Currents

$$f = \frac{1}{T}$$

Operational amplifier

$$G = \frac{V_{\text{out}}}{V_{\text{in}}} \quad \text{voltage gain}$$

$$G = -\frac{R_f}{R_1} \quad \text{inverting}$$

$$G = 1 + \frac{R_f}{R_1} \quad \text{non-inverting}$$

$$V_{\text{out}} = -R_f \left(\frac{V_1}{R_1} + \frac{V_2}{R_2} + \frac{V_3}{R_3} \right) \quad \text{summing}$$

SECTION A

In this section each item consists of a question or an incomplete statement followed by four suggested answers or completions. You are to select the most appropriate answer in each case.

You are advised to spend approximately **30 minutes** on this section.

- 1 A body is in simple harmonic motion of amplitude 0.50 m and period 4π seconds. What is the speed of the body when the displacement of the body is 0.30 m?
- A** 0.10 m s^{-1}
B 0.15 m s^{-1}
C 0.20 m s^{-1}
D 0.40 m s^{-1}
- 2 Which one of the following statements about an oscillating mechanical system at resonance, when it oscillates with a constant amplitude, is **not** correct?
- A** The amplitude of oscillations depends on the amount of damping.
B The frequency of the applied force is the same as the natural frequency of oscillation of the system.
C The total energy of the system is constant.
D The applied force prevents the amplitude from becoming too large.
- 3 Stationary waves are set up on a length of rope fixed at both ends. Which one of the following statements is true?
- A** Between adjacent nodes, particles of the rope vibrate in phase with each other.
B The mid point of the rope is always stationary.
C Nodes need not necessarily be present at each end of the rope.
D Particles of the rope at adjacent antinodes always move in the same direction.

Turn over ►

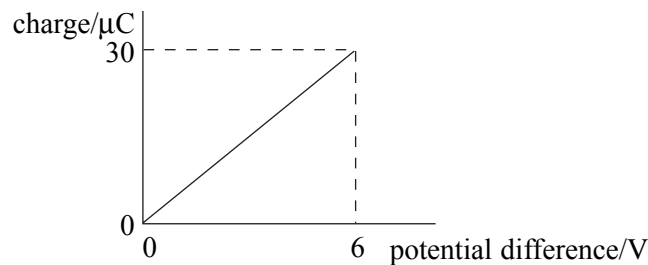
4



Point sources of sound of the same frequency are placed at S_1 and S_2 . When a sound detector is slowly moved along the line PQ , consecutive maxima of sound intensity are detected at W and Y and consecutive minima at X and Z . Which one of the following is a correct expression for the wavelength of the sound?

- A** $S_1X - S_1W$
- B** $S_1Y - S_1X$
- C** $S_1X - S_2X$
- D** $S_1Y - S_2Y$

5 The graph shows how the charge stored by a capacitor varies with the potential difference across it as it is charged from a 6 V battery.



Which one of the following statements is **not** correct?

- A** The capacitance of the capacitor is $5.0 \mu\text{F}$.
- B** When the potential difference is 2 V the charge stored is $10 \mu\text{C}$.
- C** When the potential difference is 2 V the energy stored is $10 \mu\text{J}$.
- D** When the potential difference is 6 V the energy stored is $180 \mu\text{J}$.

6 A capacitor of capacitance C discharges through a resistor of resistance R . Which one of the following statements is **not** true?

- A The time constant will increase if R is increased.
- B The time constant will decrease if C increased.
- C After charging to the same voltage, the initial discharge current will increase if R is decreased.
- D After charging to the same voltage, the initial discharge current will be unaffected if C is increased.

7 What is the angular speed of a point on the Earth's equator?

- A $7.3 \times 10^{-5} \text{ rad s}^{-1}$
- B $4.2 \times 10^{-3} \text{ rad s}^{-1}$
- C $2.6 \times 10^{-1} \text{ rad s}^{-1}$
- D 15 rad s^{-1}

8 The following data refer to two planets.

	radius/km	density/ kg m^{-3}
planet P	8 000	6 000
planet Q	16 000	3 000

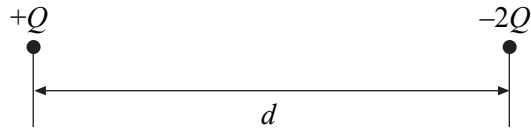
The gravitational field strength at the surface of P is 13.4 N kg^{-1} . What is the gravitational field strength at the surface of Q?

- A 3.4 N kg^{-1}
- B 13.4 N kg^{-1}
- C 53.6 N kg^{-1}
- D 80.4 N kg^{-1}

9 Near the surface of a planet the gravitational field is uniform and for two points, 10 m apart vertically, the gravitational potential difference is 3 J kg^{-1} . How much work must be done in raising a mass of 4 kg vertically through 5 m?

- A 3 J
- B 6 J
- C 12 J
- D 15 J

10



The diagram shows two particles at a distance d apart. One particle has charge $+Q$ and the other $-2Q$. The two particles exert an electrostatic force of attraction, F , on each other. Each particle is then given an additional charge $+Q$ and their separation is increased to a distance of $2d$. Which one of the following gives the force that now acts between the two particles?

- A** an attractive force of $\frac{F}{4}$
- B** a repulsive force of $\frac{F}{4}$
- C** an attractive force of $\frac{F}{2}$
- D** a repulsive force of $\frac{F}{2}$
- 11** The electrical field strength, E , and the electrical potential, V , at the surface of a sphere of radius r carrying a charge Q are given by the equations

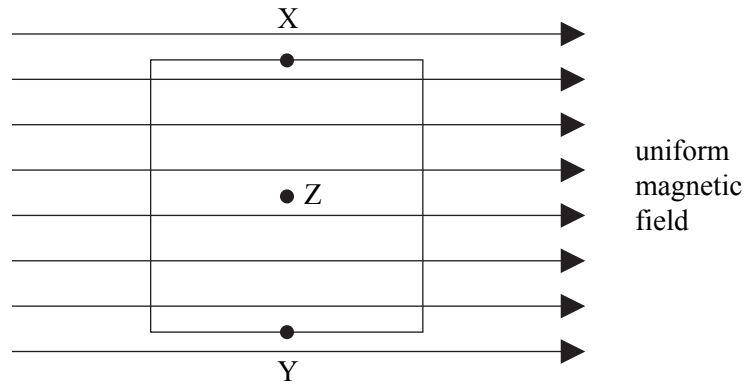
$$E = \frac{Q}{4\pi\epsilon_0 r^2} \text{ and } V = \frac{Q}{4\pi\epsilon_0 r}.$$

A school van de Graaff generator has a dome of radius 100 mm. Charge begins to leak into the air from the dome when the electric field strength at its surface is approximately $3 \times 10^6 \text{ V m}^{-1}$.

What, approximately, is the maximum potential to which the dome can be raised without leakage?

- A** $3 \times 10^4 \text{ V}$
- B** $3 \times 10^5 \text{ V}$
- C** $3 \times 10^6 \text{ V}$
- D** $3 \times 10^7 \text{ V}$

12



The diagram shows a square coil with its plane parallel to a uniform magnetic field. Which one of the following would induce an emf in the coil?

- A movement of the coil slightly to the left
 - B movement of the coil slightly downwards
 - C rotation of the coil about an axis through XY
 - D rotation of the coil about an axis perpendicular to the plane of the coil through Z
- 13 The mass of the nuclear fuel in a nuclear reactor decreases at a rate of 1.2×10^{-5} kg per hour. Assuming 100% efficiency in the reactor what is the power output of the reactor?
- A 100 MW
 - B 150 MW
 - C 200 MW
 - D 300 MW
- 14 Why is a moderator required in a thermal nuclear reactor?
- A to prevent overheating of the nuclear core
 - B to absorb surplus uranium nuclei
 - C to shield the surroundings from gamma radiation
 - D to reduce the kinetic energy of fission neutrons

Turn over ►

- 15 The sodium isotope ${}_{11}^{24}\text{Na}$ is a radioactive isotope that can be produced by bombarding the aluminium isotope ${}_{13}^{27}\text{Al}$ with neutrons. Which line, **A** to **D**, in the table correctly represents the production of ${}_{11}^{24}\text{Na}$ from the aluminium isotope ${}_{13}^{27}\text{Al}$ and its subsequent decay?

	production	decay
A	${}_{13}^{27}\text{Al} + {}_0^1\text{n} \rightarrow {}_{11}^{24}\text{Na} + {}_2^4\alpha$	${}_{11}^{24}\text{Na} \rightarrow {}_{12}^{24}\text{Mg} + {}_{+1}^0\beta + \nu$
B	${}_{13}^{27}\text{Al} + {}_0^1\text{n} \rightarrow {}_{11}^{24}\text{Na} + {}_2^4\alpha$	${}_{11}^{24}\text{Na} \rightarrow {}_{12}^{24}\text{Mg} + {}_{-1}^0\beta + \bar{\nu}$
C	${}_{13}^{27}\text{Al} + {}_0^1\text{n} \rightarrow {}_{11}^{24}\text{Na} + {}_2^3\text{He}$	${}_{11}^{24}\text{Na} \rightarrow {}_{12}^{24}\text{Mg} + {}_{+1}^0\beta + \nu$
D	${}_{13}^{27}\text{Al} + {}_0^1\text{n} \rightarrow {}_{11}^{24}\text{Na} + {}_2^3\text{He}$	${}_{11}^{24}\text{Na} \rightarrow {}_{12}^{24}\text{Mg} + {}_{-1}^0\beta + \bar{\nu}$

END OF SECTION A

THERE ARE NO QUESTIONS PRINTED ON THIS PAGE

THERE ARE NO QUESTIONS PRINTED ON THIS PAGE

Surname		Other Names	
Centre Number		Candidate Number	
Candidate Signature			

Leave blank

General Certificate of Education
June 2004
Advanced Level Examination



Physics (SPECIFICATION A)
Unit 4 Waves, Fields and Nuclear Energy

PA04

Section B

Thursday 17 June 2004 Morning Session

<p>In addition to this paper you will require:</p> <ul style="list-style-type: none"> • a calculator; • a pencil and a ruler.
--

Time allowed: The total time for Section A and Section B of this paper is 1 hour 30 minutes

Instructions

- Use blue or black ink or ball-point pen.
- Fill in the boxes at the top of this page.
- Answer **all** questions in the spaces provided. All working must be shown.
- Do all rough work in this book. Cross through any work you do not want marked.

Information

- The maximum mark for this Section is 30.
- Mark allocations are shown in brackets.
- Section A and Section B of this paper together carry 15% of the total marks for Physics Advanced.
- A *Data sheet* is provided on pages 3 and 4 of Section A. You may wish to detach this perforated sheet at the start of the examination.
- You are expected to use a calculator where appropriate.
- In questions requiring description and explanation you will be assessed on your ability to use an appropriate form and style of writing, to organise relevant information clearly and coherently, and to use specialist vocabulary where appropriate. The degree of legibility of your handwriting and the level of accuracy of your spelling, punctuation and grammar will also be taken into account.

For Examiner's Use			
Number	Mark	Number	Mark
1			
2			
3			
4			
Total (Column 1)	→		
Total (Column 2)	→		
TOTAL			
Examiner's Initials			

Answer **all** questions.

You are advised to spend approximately **one** hour on this section.

- 1** **Figure 1** shows a section of a diffraction grating. Monochromatic light of wavelength λ is incident normally on its surface. Light waves diffracted through angle θ form the **second** order image after passing through a converging lens (not shown). **A**, **B** and **C** are adjacent slits on the grating.

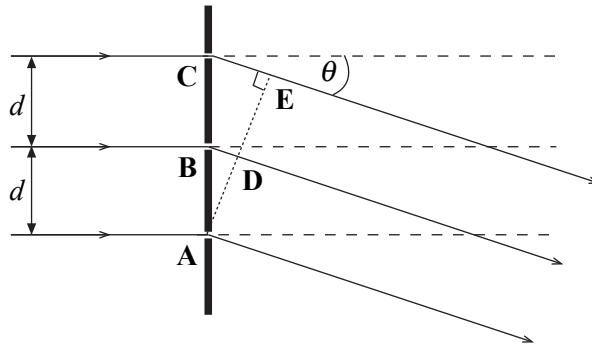


Figure 1

- (a) (i) State the phase difference between the waves at **A** and **D**.

.....

- (ii) State the path length between **C** and **E** in terms of λ .

.....

- (iii) Use your results to show that, for the second order image,
 $2\lambda = d \sin \theta$,
 where d is the distance between adjacent slits.

.....

.....

.....

.....

.....

.....

(3 marks)

- (b) A diffraction grating has 4.5×10^5 lines m^{-1} . It is being used to investigate the line spectrum of hydrogen, which contains a visible blue-green line of wavelength 486 nm. Determine the highest order diffracted image that could be produced for this spectral line by this grating.

.....

.....

.....

.....

.....

.....

.....

(2 marks)

5

TURN OVER FOR THE NEXT QUESTION

Turn over ▶

2 (a)

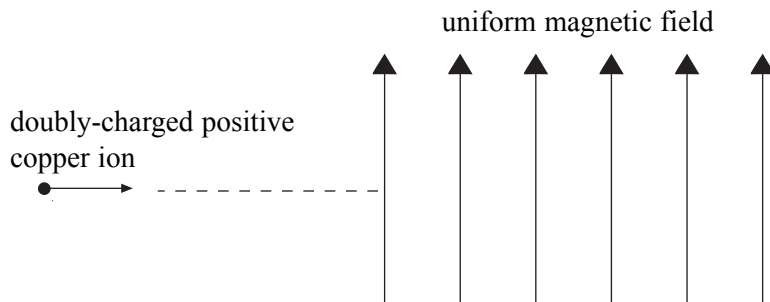


Figure 2

Figure 2 shows a doubly-charged positive ion of the copper isotope ${}_{29}^{63}\text{Cu}$ that is projected into a vertical magnetic field of flux density 0.28 T, with the field directed upwards. The ion enters the field at a speed of $7.8 \times 10^5 \text{ m s}^{-1}$.

- (i) State the initial direction of the magnetic force that acts on the ion.

.....

- (ii) Describe the subsequent path of the ion as fully as you can. Your answer should include both a qualitative description and a calculation.

$$\text{mass of } {}_{29}^{63}\text{Cu ion} = 1.05 \times 10^{-25} \text{ kg}$$

.....

.....

.....

.....

.....

.....

.....

.....

(5 marks)

(b) State the effect on the path in part (a) if the following changes are made separately.

(i) The strength of the magnetic field is doubled.

.....
.....

(ii) A singly-charged positive ${}_{29}^{63}\text{Cu}$ ion replaces the original one.

.....
.....

(3 marks)

8

TURN OVER FOR THE NEXT QUESTION

Turn over ▶

3 You may be awarded marks for the quality of written communication provided in your answers to part (a)

(a) In the context of an atomic nucleus,

(i) state what is meant by *binding energy*, and explain how it arises,

.....

.....

.....

.....

.....

.....

.....

(ii) state what is meant by *mass difference*,

.....

.....

.....

.....

.....

.....

.....

(iii) state the relationship between binding energy and mass difference.

.....

.....

(4 marks)

(b) Calculate the average binding energy per nucleon, in MeV nucleon⁻¹, of the zinc nucleus ${}_{30}^{64}\text{Zn}$.

mass of ${}_{30}^{64}\text{Zn}$ atom	=	63.92915 u
mass of proton	=	1.00728 u
mass of neutron	=	1.00867 u
mass of electron	=	0.00055 u

.....

.....

.....

.....

.....

.....

.....

.....

.....

.....

(5 marks)

(c) Why would you expect the zinc nucleus to be very stable?

.....

.....

.....

.....

(1 mark)

10

- 4 (a) The Moon’s orbit around the Earth may be assumed to be circular. Explain why no work is done by the gravitational force that acts on the Moon to keep it in orbit around the Earth.

You may be awarded marks for the quality of written communication provided in your answer.

.....

.....

.....

.....

.....

.....

.....

.....

.....

.....

(3 marks)

- (b) Give an example of a situation where a body

- (i) travels at constant speed but experiences a continuous acceleration,

.....

.....

- (ii) experiences a maximum acceleration when its speed is zero.

.....

.....

(2 marks)

QUALITY OF WRITTEN COMMUNICATION (2 marks)

5

2

END OF QUESTIONS